









Count the shapes and write
the correct number next to each shape!



	<input data-bbox="311 1814 430 1937" type="text"/>		<input data-bbox="646 1814 766 1937" type="text"/>		<input data-bbox="973 1814 1093 1937" type="text"/>		<input data-bbox="1308 1814 1428 1937" type="text"/>
	<input data-bbox="311 1993 430 2116" type="text"/>		<input data-bbox="646 1993 766 2116" type="text"/>		<input data-bbox="973 1993 1093 2116" type="text"/>		<input data-bbox="1308 1993 1428 2116" type="text"/>